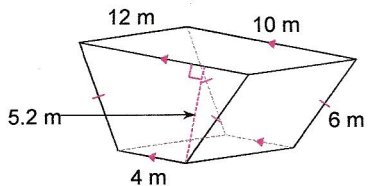
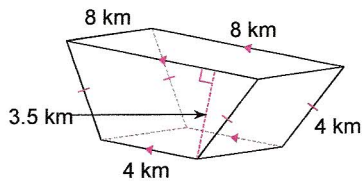


Find the volume of each figure. Round your answers to the nearest hundredth, if necessary.

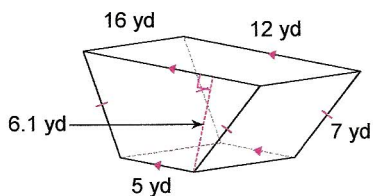
1)



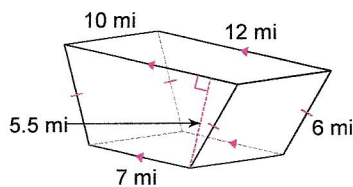
2)



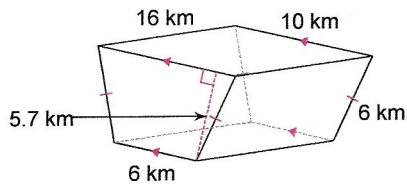
3)



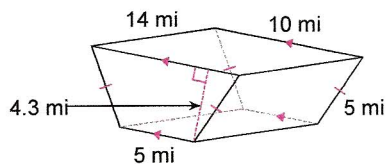
4)



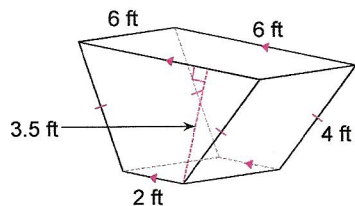
5)



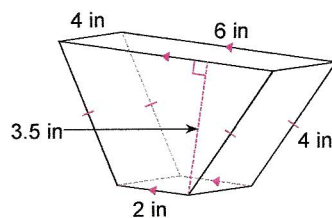
6)



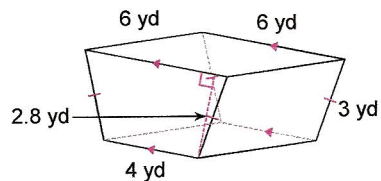
7)



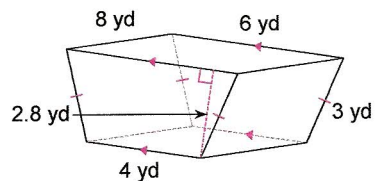
8)



9)



10)



Answers to

- 1) 436.8 m^3
- 5) 729.6 km^3
- 9) 84 yd^3

- 2) 168 km^3
- 6) 451.5 mi^3
- 10) 112 yd^3

- 3) 829.6 yd^3
- 7) 84 ft^3

- 4) 522.5 mi^3
- 8) 56 in^3