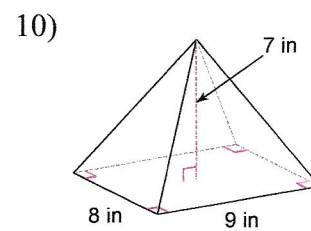
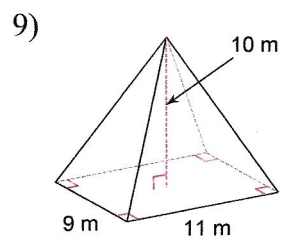
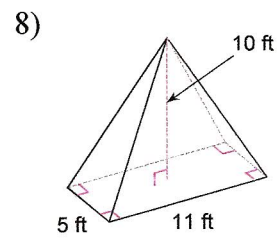
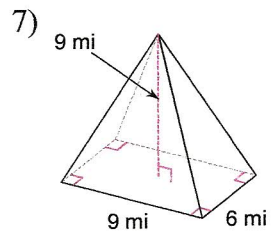
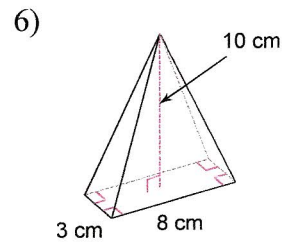
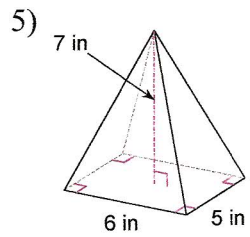
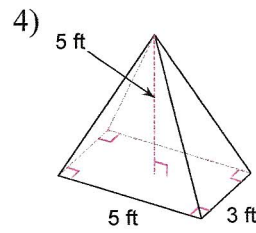
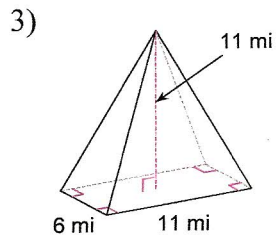
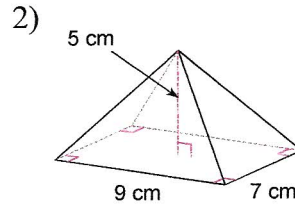
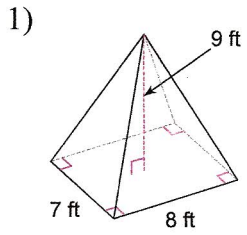


Find the volume of each figure. Round your answers to the nearest hundredth, if necessary.



Answers to

- 1) 168 ft^3
- 5) 70 in^3
- 9) 330 m^3

- 2) 105 cm^3
- 6) 80 cm^3
- 10) 168 in^3

- 3) 242 mi^3
- 7) 162 mi^3

- 4) 25 ft^3
- 8) 183.33 ft^3