

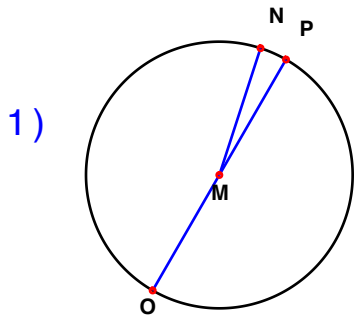
Name : _____

Score : _____

Teacher : _____

Date : _____

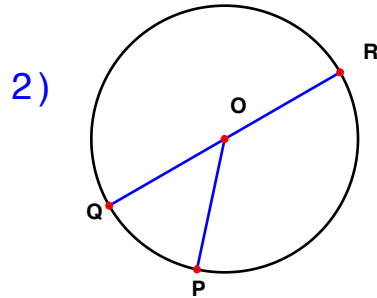
Identify the elements for each problem.



Circle: _____

Radius: _____

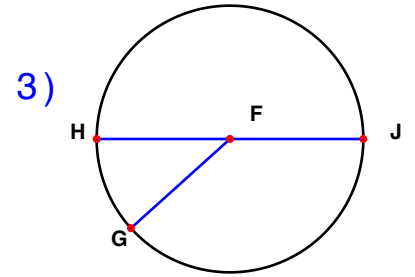
Diameter: _____



Circle: _____

Radius: _____

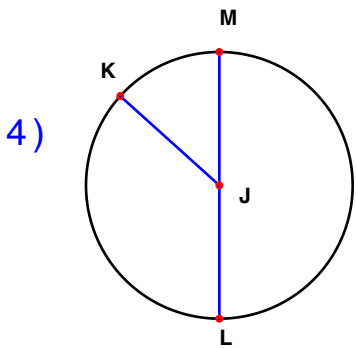
Diameter: _____



Circle: _____

Radius: _____

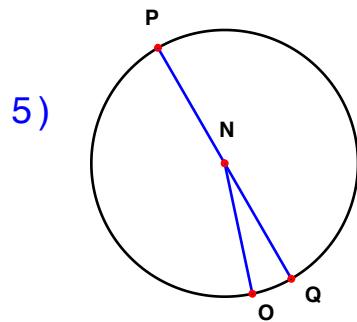
Diameter: _____



Circle: _____

Radius: _____

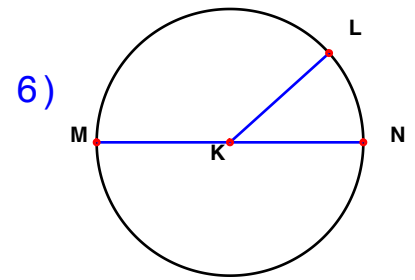
Diameter: _____



Circle: _____

Radius: _____

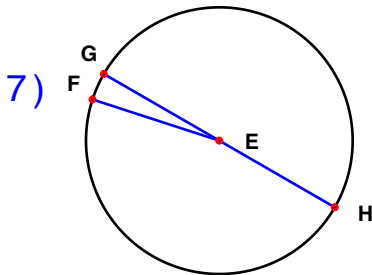
Diameter: _____



Circle: _____

Radius: _____

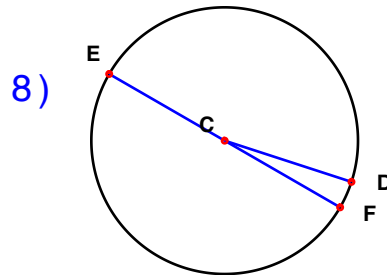
Diameter: _____



Circle: _____

Radius: _____

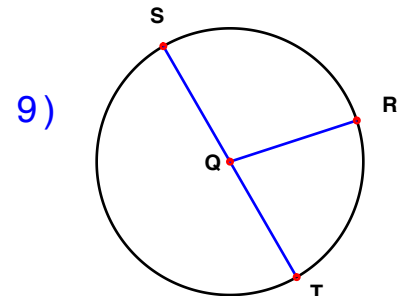
Diameter: _____



Circle: _____

Radius: _____

Diameter: _____



Circle: _____

Radius: _____

Diameter: _____



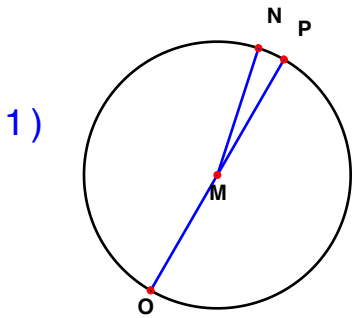
Name : _____

Score : _____

Teacher : _____

Date : _____

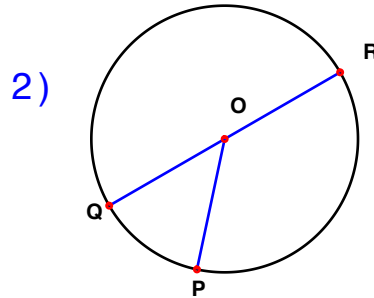
Identify the elements for each problem.



Circle: M

Radius: MN MO MP

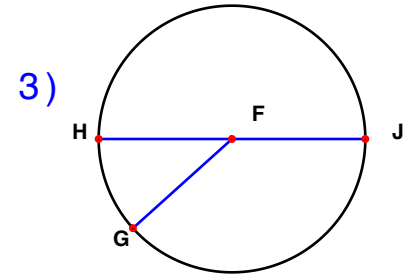
Diameter: OP



Circle: O

Radius: OP OQ OR

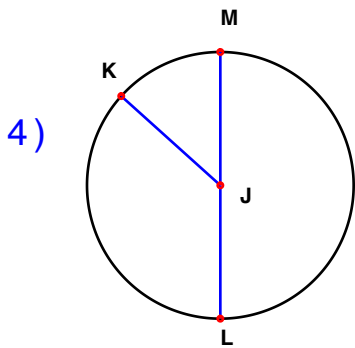
Diameter: QR



Circle: F

Radius: FG FH FJ

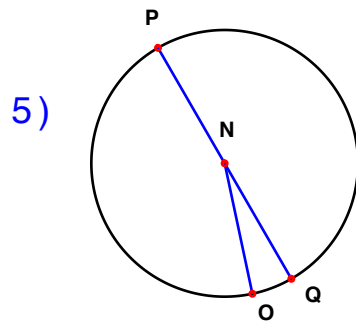
Diameter: HJ



Circle: J

Radius: JK JL JM

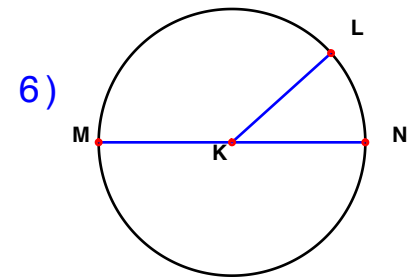
Diameter: LM



Circle: N

Radius: NO NP NQ

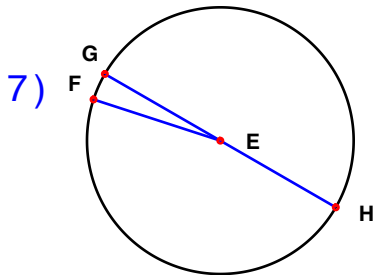
Diameter: PQ



Circle: K

Radius: KL KM KN

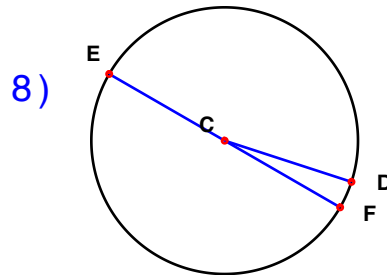
Diameter: MN



Circle: E

Radius: EF EG EH

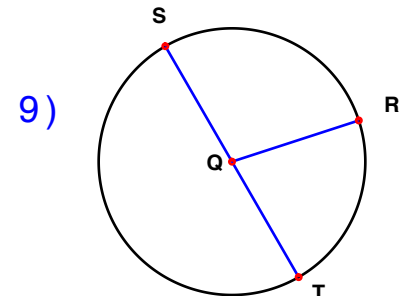
Diameter: GH



Circle: C

Radius: CD CE CF

Diameter: EF



Circle: Q

Radius: QR QS QT

Diameter: ST

