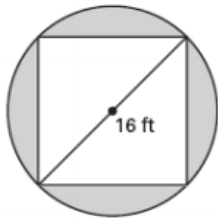
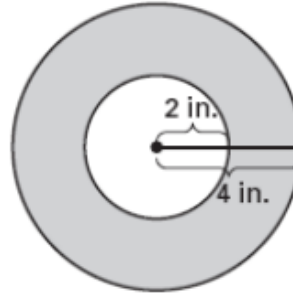


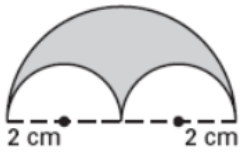
Name:



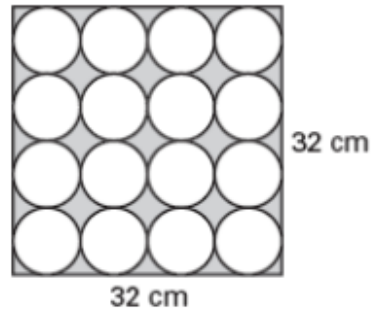
1)



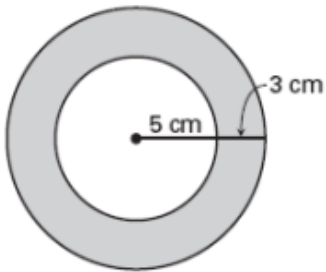
2)



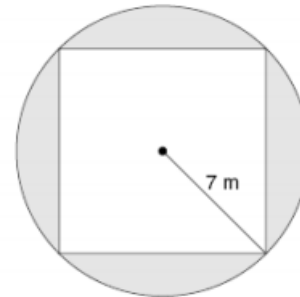
3)



4)

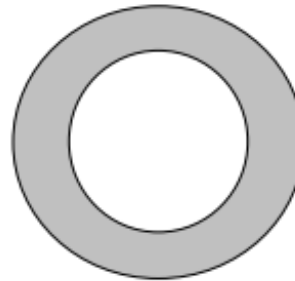


5)



6)

This figure consists of 2 concentric circles.
If the shaded area is 64π sq. in.
and the smaller circle has a
radius of 6 in., what is the
radius, in inches of the
larger circle?



7))