

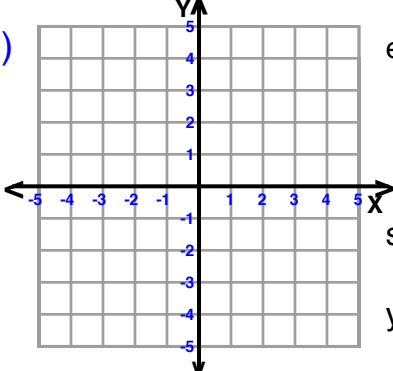
Name : \_\_\_\_\_

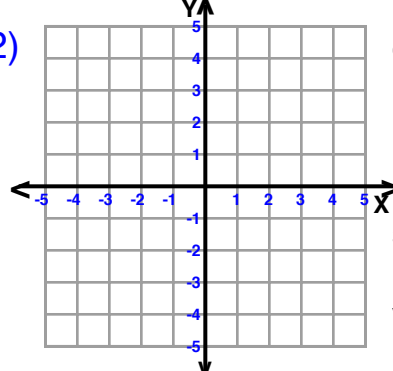
Score : \_\_\_\_\_

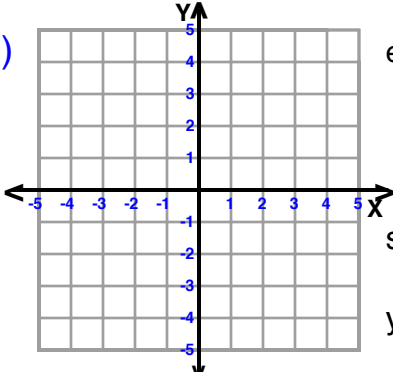
Teacher : \_\_\_\_\_

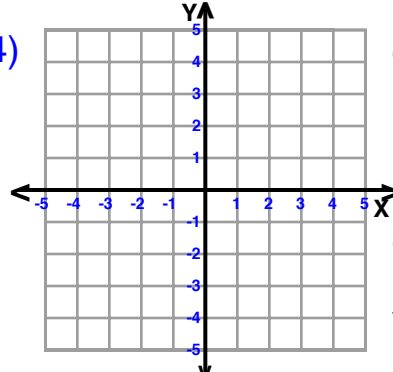
Date : \_\_\_\_\_

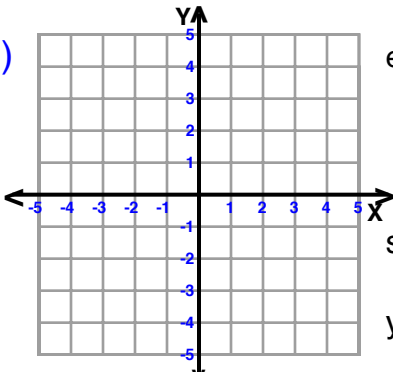
### Sketch Each Line and Write the Equation

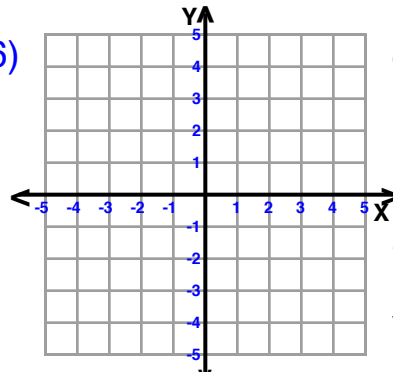
1)  equation \_\_\_\_\_  
slope (m) = 3  
y-intercept = 2

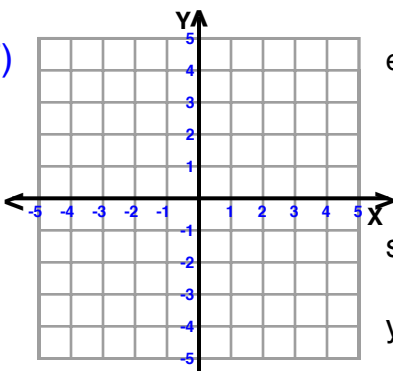
2)  equation \_\_\_\_\_  
slope (m) =  $\frac{1}{2}$   
y-intercept = -1

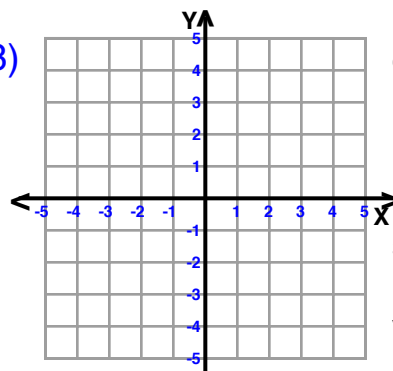
3)  equation \_\_\_\_\_  
slope (m) =  $\frac{8}{3}$   
y-intercept = -5

4)  equation \_\_\_\_\_  
slope (m) =  $-\frac{4}{3}$   
y-intercept = -1

5)  equation \_\_\_\_\_  
slope (m) =  $\frac{1}{3}$   
y-intercept = -4

6)  equation \_\_\_\_\_  
slope (m) =  $\frac{1}{3}$   
y-intercept = 3

7)  equation \_\_\_\_\_  
slope (m) = -6  
y-intercept = -3

8)  equation \_\_\_\_\_  
slope (m) = -5  
y-intercept = -3

