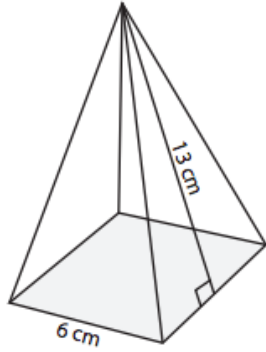


Name: _____



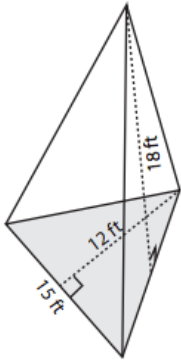
1)

SA = _____

Draw , label the base;

Perimeter

Find Area of Base:



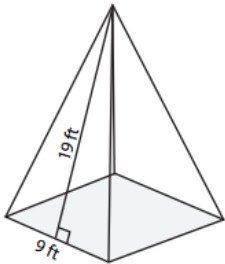
2)

SA = _____

Draw , label the base

Perimeter

Find Area of Base:



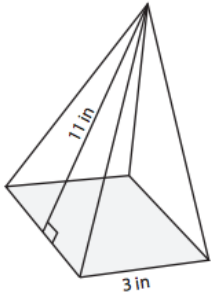
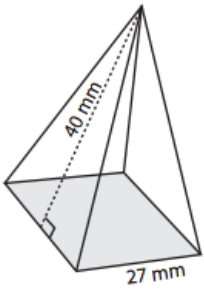
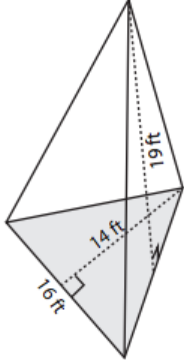
3)

SA = _____

Draw , label the base:

Perimeter

Find Area of Base:

<p>4)</p> 	SA =	
<p>Draw , label the base</p>		Perimeter
<p>Find Area of Base</p>		
<p>5)</p> 	SA =	
<p>Draw , label the base</p>	Perimeter	B=Area of Base
<p>6)</p> 	SA =	
<p>Draw , label the base</p>	Perimeter	B=Area of Base

Answers:

1. $SA = 192 \text{ cm}^2$

2. $SA = 495 \text{ ft}^2$

3. $SA = 423 \text{ ft}^2$

4. $SA = 75 \text{ m}^2$

5. $SA = 2889 \text{ mm}^2$

6. $SA = 568 \text{ ft}^2$