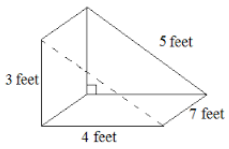
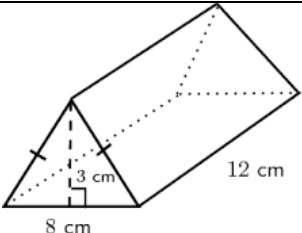
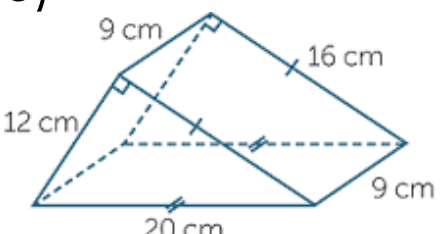
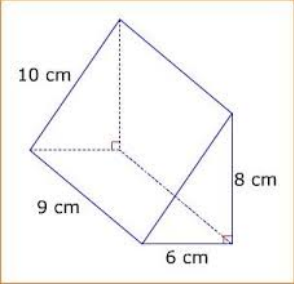
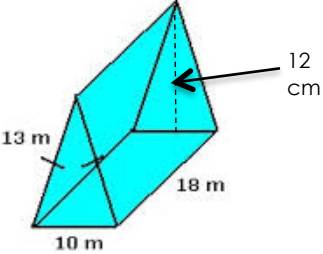
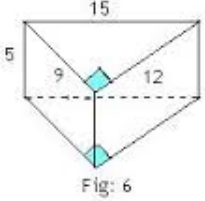


Name:

<p>1)</p> 		
<p>Draw , label the base</p>	<p>Perimeter</p>	<p>B=Area of Base</p>
<p>2)</p> 		
<p>Draw , label the base</p>	<p>Perimeter</p>	<p>B=Area of Base</p>
<p>3)</p> 		
<p>Draw , label the base</p>	<p>Perimeter</p>	<p>B=Area of Base</p>

<p>4)</p> 		
<p>Draw , label the base</p>	<p>Perimeter</p>	<p>B=Area of Base</p>
<p>5)</p> 		
<p>Draw , label the base</p>	<p>Perimeter</p>	<p>B=Area of Base</p>
<p>6)</p>  <p>Fig: 6</p>		
<p>Draw , label the base</p>	<p>Perimeter</p>	<p>B=Area of Base</p>

## **Answers:**

1. 96 ft<sup>2</sup>
2. 264 cm<sup>2</sup>
3. 624 cm<sup>2</sup>
4. 264 cm<sup>2</sup>
5. 768 m<sup>2</sup>
6. 288 cm<sup>2</sup>